



Thursday - Count the money.



Complete the bar models.

£ _____			
			

£ 30		


£10				
				

Match the money to the correct total.





£25
£60
£10


 Dan thinks he has £13. Is he correct? Explain why.



